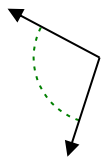




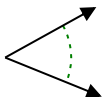
Determine if the angle shown is acute, obtuse, right or straight.

Answers

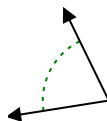
Ex)



1)



2)

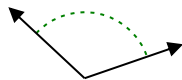


Ex. obtuse

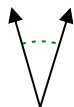
1. _____

2. _____

3)



4)



5)

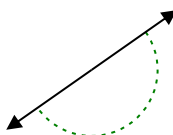


3. _____

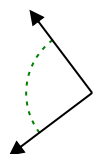
4. _____

5. _____

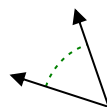
6)



7)



8)

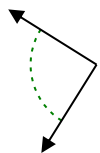


6. _____

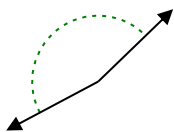
7. _____

8. _____

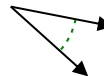
9)



10)



11)

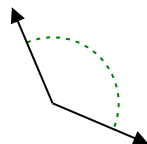


9. _____

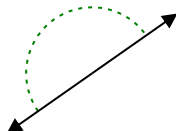
10. _____

11. _____

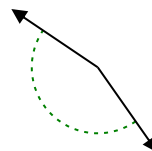
12)



13)



14)



12. _____

13. _____

14. _____

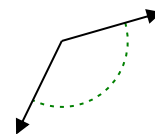
15)



16)



17)

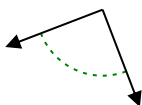


15. _____

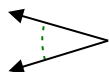
16. _____

17. _____

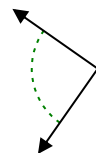
18)



19)



20)



18. _____

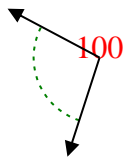
19. _____

20. _____

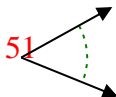


Determine if the angle shown is acute, obtuse, right or straight.

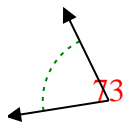
Ex)



1)



2)



Ex. obtuse

1. acute

2. acute

3. obtuse

4. acute

5. acute

6. straight

7. right

8. acute

9. right

10. obtuse

11. acute

12. obtuse

13. straight

14. obtuse

15. obtuse

16. acute

17. obtuse

18. right

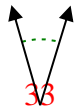
19. acute

20. right

3)



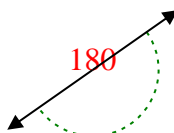
4)



5)



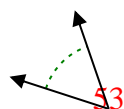
6)



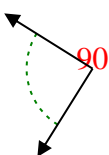
7)



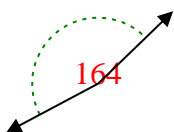
8)



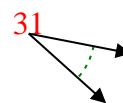
9)



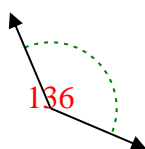
10)



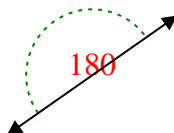
11)



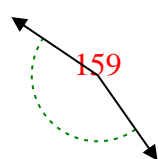
12)



13)



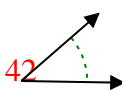
14)



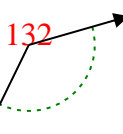
15)



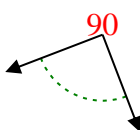
16)



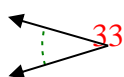
17)



18)



19)



20)

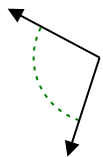




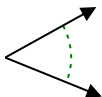
Determine if the angle shown is acute, obtuse, right or straight.

Answers

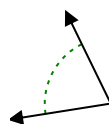
Ex)



1)



2)

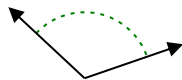


Ex. obtuse

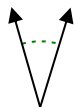
1. _____

2. _____

3)



4)



5)

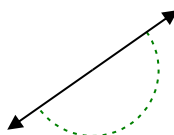


3. _____

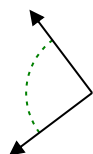
4. _____

5. _____

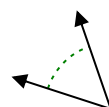
6)



7)



8)

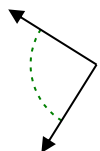


6. _____

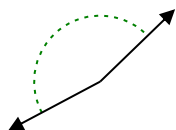
7. _____

8. _____

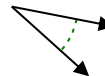
9)



10)



11)

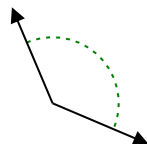


9. _____

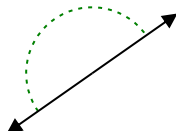
10. _____

11. _____

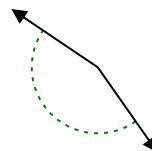
12)



13)



14)



12. _____

13. _____

14. _____

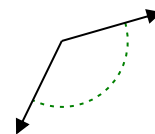
15)



16)



17)

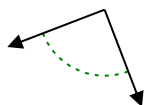


15. _____

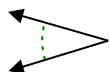
16. _____

17. _____

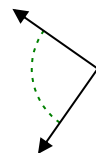
18)



19)



20)



18. _____

19. _____

20. _____